

MUSIC MATH WORKSHEETS

When you complete the worksheets PRINT/Save as PDF
and email to mmadonia@cps.edu

NAME:

ROOM:

1) $\text{♩} + \text{♩} - \text{♩} + \text{♩} = \underline{\hspace{2cm}}$ beats

2) $\text{♩} - \text{♩} + \text{♩} + \text{♩} = \underline{\hspace{2cm}}$ beats

3) $\text{♩} + \text{♩} + \text{♩} - \text{♩} = \underline{\hspace{2cm}}$ beats

4) $\text{♩} + \text{♩} - \text{♩} - \text{♩} = \underline{\hspace{2cm}}$ beats

5) $\text{♩} - \text{♩} + \text{♩} + \text{♩} = \underline{\hspace{2cm}}$ beats

6) $\text{♩} + \text{♩} + \text{♩} - \text{♩} = \underline{\hspace{2cm}}$ beats

7) $\text{♩} - \text{♩} + \text{♩} + \text{♩} = \underline{\hspace{2cm}}$ beats





























8) $\text{♩} + \text{♩} + \text{♩} + \text{♩} = \underline{\hspace{2cm}}$ beats

9) $\text{♩} + \text{♩} + \text{♩} - \text{♩} = \underline{\hspace{2cm}}$ beats

10) $\text{♩} + \text{♩} - \text{♩} + \text{♩} = \underline{\hspace{2cm}}$ beats

Music Math 1




Whole, Half and Quarter Notes

1.  +  = _____ beats
2.  +  = _____ beats
3.  +  = _____ beats
4.  +  = _____ beats
5.  +  = _____ beats
6.  +  +  = _____ beats
7.  +  +  = _____ beats
8.  +  +  +  = _____ beats
9.  +  +  +  = _____ beats
10.  +  +  +  = _____ beats

____/10

Name: _____

Add the values of these notes remembering that:

 = 4  = 2  = 1



Musical Mathematics

Fill in the correct answer.

1)  +  =

2)  +  =

3)  +  =

4)  -  =

5)  +  =

6)  -  =

7)  -  =

8)    =

9)    =

10)    =

