





Music Math



Add the rhythm values of the notes and rests below. You can check your answers at the very end. Good luck!



Not sure of the values? Check the chart for some reminders.



Level 1

1.  +  = _____



2.  +  = _____



3.  +  = _____

4.  +  = _____



5.  +  = _____



6.  +  = _____

7.  +  = _____



8.  +  = _____



9.  +  = _____



10.  +  = _____



11.  +  = _____



12.  +  = _____



13.  +  = _____



14.  +  = _____



15.  +  = _____

16.  +  = _____

17.  +  = _____

18.  +  = _____

19.  +  = _____

20.  +  = _____

Level 2

$$\text{♩.} = \text{♩} + \frac{1}{2}\text{♩}$$

$$\text{♩.} = \text{♩} + \frac{1}{2}\text{♩}$$

1. $\text{♩.} + \text{♩} = \underline{\hspace{2cm}}$

2. $\text{♩} + \text{♩.} = \underline{\hspace{2cm}}$

3. $\text{♩} + \text{♩.} = \underline{\hspace{2cm}}$

4. $\text{♩.} + \text{♩} = \underline{\hspace{2cm}}$

5. $\text{♩.} + \text{♩} = \underline{\hspace{2cm}}$

6. $\text{♩} + \text{♩} = \underline{\hspace{2cm}}$

7. $\text{♩} + \text{♩.} = \underline{\hspace{2cm}}$

8. $\text{♩.} + \text{♩.} = \underline{\hspace{2cm}}$

9. $\text{♩.} + \text{♩.} = \underline{\hspace{2cm}}$

10. $\text{♩} + \text{♩} = \underline{\hspace{2cm}}$

11. $\text{♩} + \text{♩} = \underline{\hspace{2cm}}$

12. $\text{♩.} + \text{♩} = \underline{\hspace{2cm}}$

13. $\text{♩} + \text{♩.} = \underline{\hspace{2cm}}$

14. $\text{♩} + \text{♩} = \underline{\hspace{2cm}}$

15. $\text{♩.} + \text{♩} = \underline{\hspace{2cm}}$

16. $\text{♩} + \text{♩} = \underline{\hspace{2cm}}$

17. $\text{♩} + \text{♩.} = \underline{\hspace{2cm}}$

18. $\text{♩} + \text{♩} = \underline{\hspace{2cm}}$

19. $\text{♩.} + \text{♩.} = \underline{\hspace{2cm}}$

20. $\text{♩} + \text{♩} = \underline{\hspace{2cm}}$

